

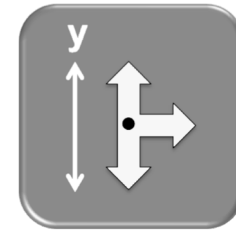


# Space Shuttle Standard

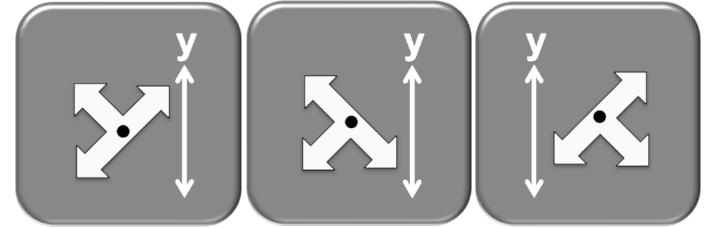
Score: /4

Name: \_\_\_\_\_

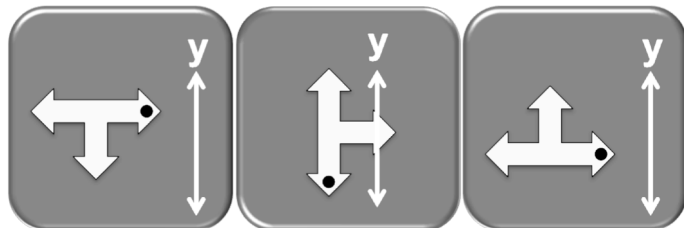
Only 1 of the 3 answers under each card is correct.  
Follow the instructions and  
put a circle around each correct answer.



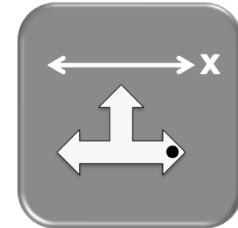
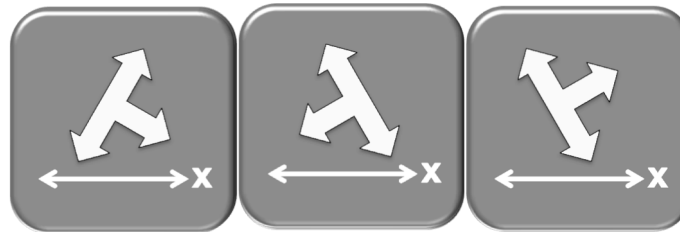
REFLECT across the y-axis  
and ROTATE 45° clockwise



ROTATE 90° clockwise



REFLECT across the x-axis



REFLECT across the x-axis  
and ROTATE 45° clockwise

