



# Shapes

Score: /7

Name: \_\_\_\_\_


(Adult to read instructions and answers out loud.)

Can you name each shape?


There are 2 names under each shape, but only one is correct.

Which one is it?


As your student answers each question, put a circle around each answer.



Triangle Cone




Circle Square




Triangle Cone



Rectangle Square



Rectangle Square



Cube Square



Circle Sphere