

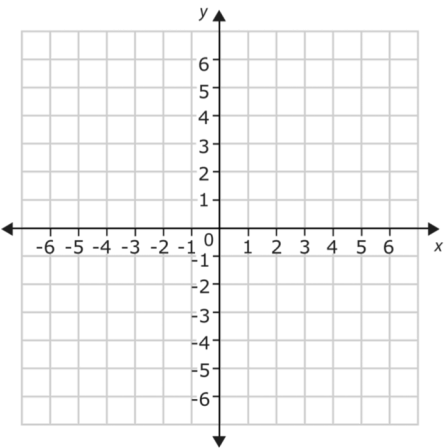


Tulip Farm - Standard

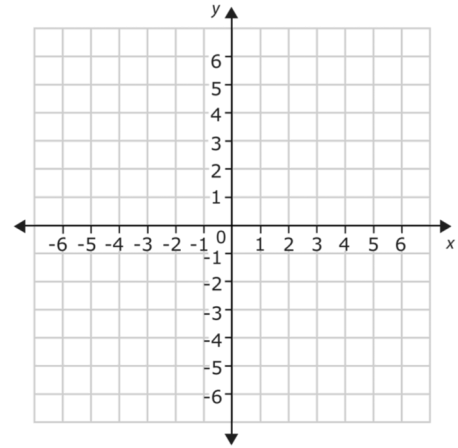
Score: /6

Name: _____

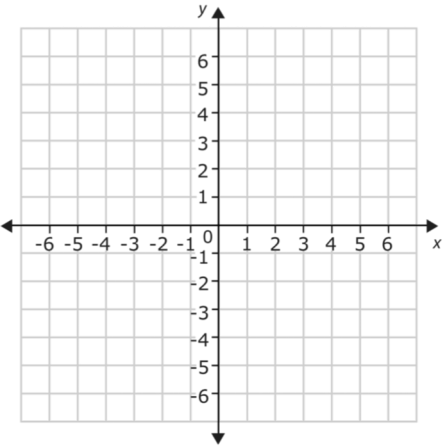
Draw the coordinates on each graph. ●



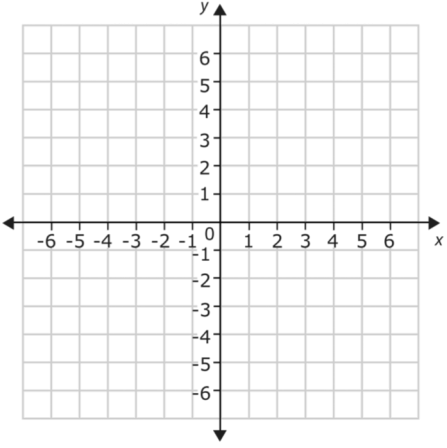
- (3, 5)
- (4, 5)
- (5, 5)
- (6, 5)



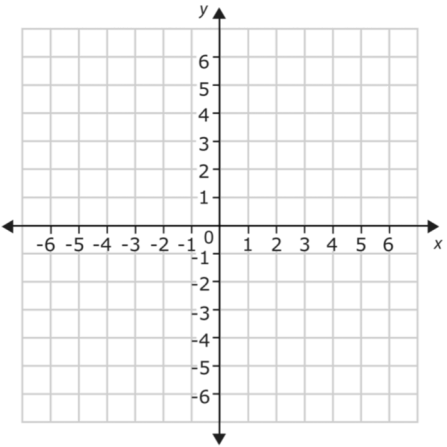
- (6, 3)
- (6, 4)
- (6, 5)
- (6, 6)



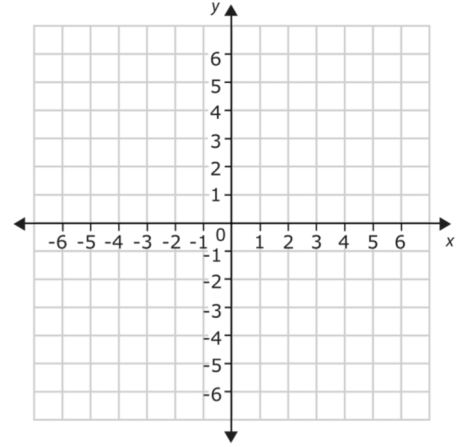
- (-3, 5)
- (-4, 5)
- (-5, 5)
- (-6, 5)



- (3, -2)
- (4, -2)
- (5, -2)
- (6, -2)



- (-4, 2)
- (-4, 3)
- (-4, 4)
- (-4, 5)



- (2, -3)
- (3, -3)
- (4, -3)
- (5, -3)