

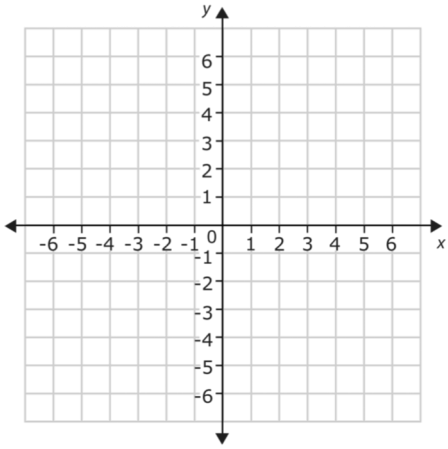


Tulip Farm - Advanced

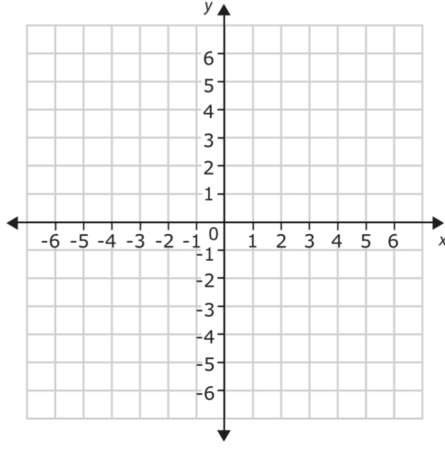
Score: /6

Name: _____

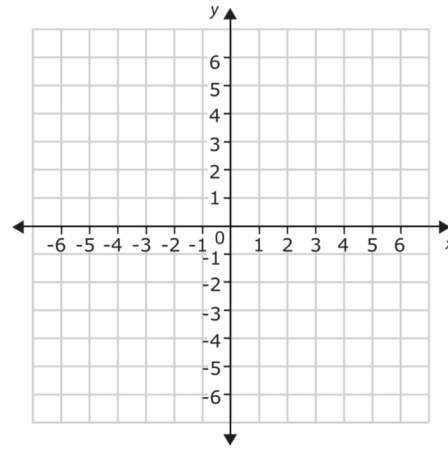
Draw the coordinates on each graph. ●
These examples are from the game.



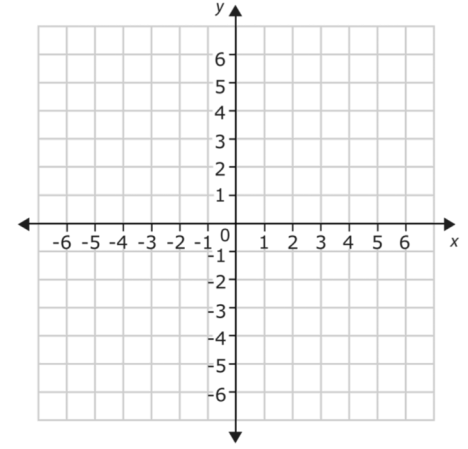
- (5, -3)
- (5, -4)
- (5, -5)
- (5, -6)



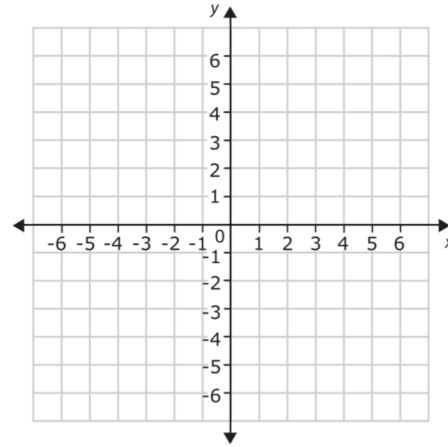
- (-4, 2)
- (-4, 3)
- (-4, 4)
- (-4, 5)



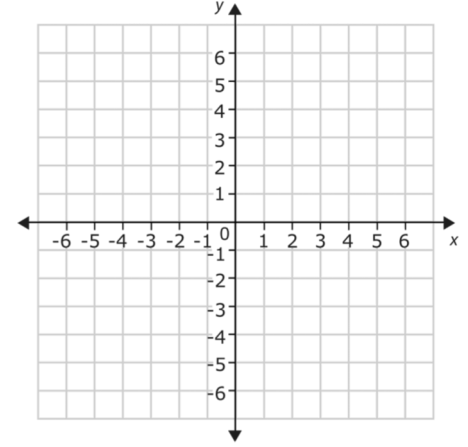
- (3, 3)
- (3, 4)
- (3, 5)
- (3, 6)



- (2, 4)
- (3, 4)
- (4, 4)
- (5, 4)



- (-3, -2)
- (-4, -2)
- (-5, -2)
- (-6, -2)



- (-3, 2)
- (-3, 3)
- (-3, 4)
- (-3, 5)