



Icy Poles US Liquid Standard

Score: /12

How much liquid do you need to make each icy pole?
Fill in this worksheet as you play the game.
Show how you calculated each one.



Name: _____



Inches:
 $3.5 \times 1.5 \times 1.5$

_____ fl oz
= _____




Inches:
 $4 \times 1.5 \times 1.5$

_____ fl oz
= _____



Inches:
 $4.8 \times 2 \times 1.5$

_____ fl oz
= _____



Inches:
 $5 \times 2 \times 1.5$

_____ fl oz
= _____



Inches:
 $6 \times 3.5 \times 4.5$

_____ fl oz
= _____



Inches:
 $7 \times 3.5 \times 4.5$

_____ fl oz
= _____



Inches:
 $3.5 \times 4.5 \times 4.5$

_____ fl oz
= _____



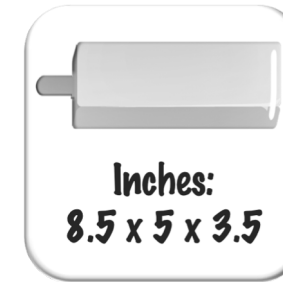
Inches:
 $4 \times 4.5 \times 4.5$

_____ fl oz
= _____




Inches:
 $6.8 \times 4.6 \times 3.5$

_____ fl oz
= _____



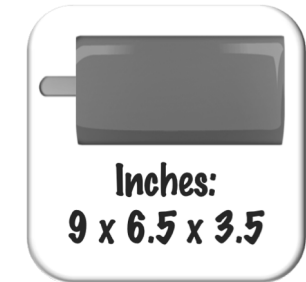
Inches:
 $8.5 \times 5 \times 3.5$

_____ fl oz
= _____



Inches:
 $8 \times 6 \times 3.5$

_____ fl oz
= _____



Inches:
 $9 \times 6.5 \times 3.5$

_____ fl oz
= _____