



# Underwater

Score: /6

Name: \_\_\_\_\_

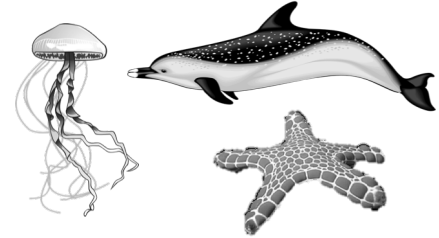
Follow the instructions under each example.  
After you do the turn, what can you see?  
Put a circle around your answer.




Do a  $\frac{1}{2}$  turn clockwise



Do a  $\frac{1}{4}$  turn anticlockwise




Do a  $\frac{1}{2}$  turn anticlockwise



Do a  $\frac{1}{4}$  turn clockwise



Do a  $\frac{1}{4}$  turn anticlockwise



Do a  $\frac{1}{4}$  turn clockwise

