



Time Machine

Score: /5

Name: _____

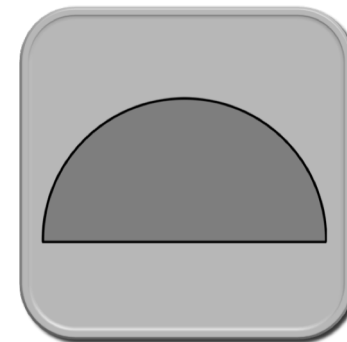
There are three numbers under each shape.
Only one is correct.
Put a circle around each correct answer.



4
faces

6
faces

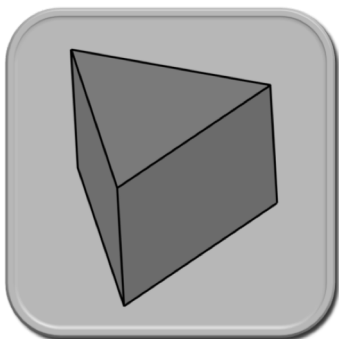
8
faces



2
corners

3
corners

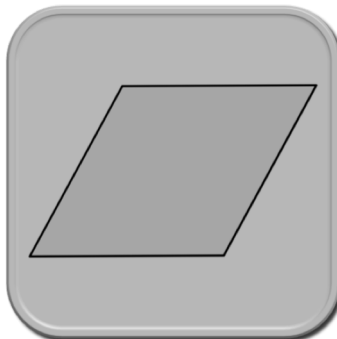
4
corners



4
faces

5
faces

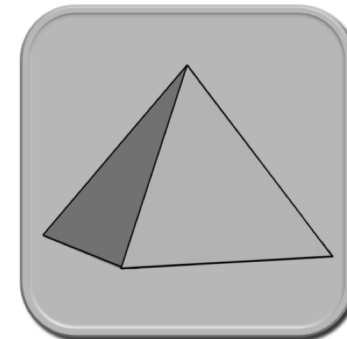
6
faces



2
edges

3
edges

4
edges



3
faces

5
faces

6
faces