



# Mushrooms Advanced

Score: /7

Name: \_\_\_\_\_

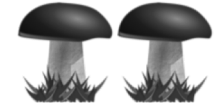
Use the TABLE to add up the TOTAL number of mushrooms in each example.  
Write your answers under each one.

## TABLE


 = 20

 = 10

 = 5



\_\_\_\_\_  
\_\_\_\_\_  
\_\_\_\_\_  
= \_\_\_\_\_



\_\_\_\_\_  
\_\_\_\_\_  
\_\_\_\_\_  
= \_\_\_\_\_



\_\_\_\_\_  
\_\_\_\_\_  
\_\_\_\_\_  
= \_\_\_\_\_




\_\_\_\_\_  
\_\_\_\_\_  
\_\_\_\_\_  
= \_\_\_\_\_



\_\_\_\_\_  
\_\_\_\_\_  
\_\_\_\_\_  
= \_\_\_\_\_



\_\_\_\_\_  
\_\_\_\_\_  
\_\_\_\_\_  
= \_\_\_\_\_



\_\_\_\_\_  
\_\_\_\_\_  
\_\_\_\_\_  
= \_\_\_\_\_