



Corners, Edges & Faces


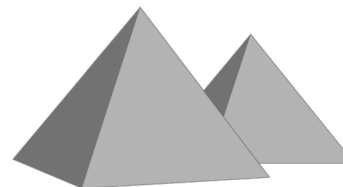



Did you complete the Super Challenge? Yes / No

Score: /12

How many CORNERS, EDGES or FACES do the shapes below have?

Write your answers under each one.

Name: _____



Corners: _____

Corners: _____

Corners: _____

Corners: _____

Corners: _____

Corners: _____

Edges: _____

Edges: _____

Edges: _____

Edges: _____

Edges: _____

Edges: _____

Faces: _____





Faces: _____

Faces: _____

Faces: _____

Faces: _____

Faces: _____



Corners: _____

Corners: _____

Corners: _____

Corners: _____

Corners: _____

Corners: _____

Edges: _____

Edges: _____

Edges: _____

Edges: _____

Edges: _____

Edges: _____

Faces: _____

Faces: _____

Faces: _____

Faces: _____

Faces: _____

Faces: _____